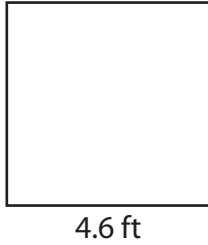


# Perimeter of a Square

---

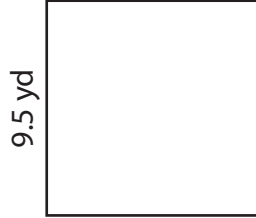
Find the perimeter of each square.

1)



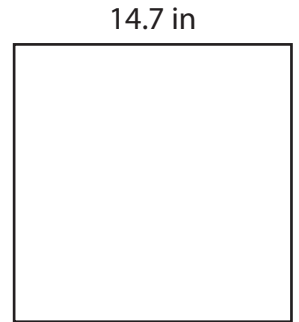
Perimeter = \_\_\_\_\_

2)




Perimeter = \_\_\_\_\_

3)



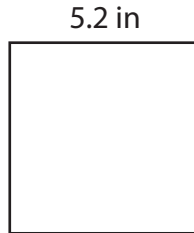
Perimeter = \_\_\_\_\_

4)



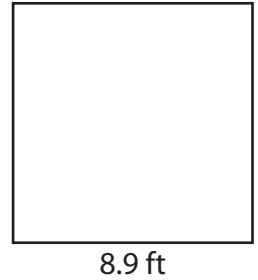
Perimeter = \_\_\_\_\_

5)



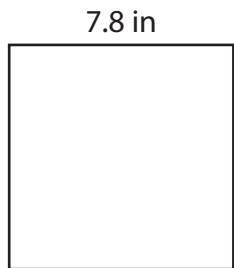
Perimeter = \_\_\_\_\_

6)




Perimeter = \_\_\_\_\_

7)



Perimeter = \_\_\_\_\_

8)



Perimeter = \_\_\_\_\_

9)



Perimeter = \_\_\_\_\_