

Finding Side Length from Perimeter

Find the side length of each square using the given perimeter.

1) Perimeter = 76 yd

2) Perimeter = 28 ft

3) Perimeter = 52 in



Side l

Preview

4) Pe

Become a member to unlock
unrestricted access to both printable
and online worksheets.






Side l

www.tutoringhour.com

7) Perimeter = 88 ft

8) Perimeter = 64 in

9) Perimeter = 96 yd



Side length = _____

Side length = _____

Side length = _____