


Finding Side Length from Perimeter


Find the side length of each square using the given perimeter.

1) Perimeter = 32 mm



Side length = _____

2) Perimeter = 64 m




Side length = _____

3) Perimeter = 80 cm



Side length = _____

4) Perimeter = 52 cm




Side length = _____

5) Perimeter = 16 mm




Side length = _____

6) Perimeter = 8 m




Side length = _____

7) Perimeter = 24 m




Side length = _____

8) Perimeter = 48 cm



Side length = _____

9) Perimeter = 72 mm



Side length = _____