
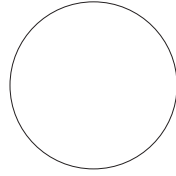



Phases of the Moon

Label the phase of the Moon that comes before and after each given phase.

1)



full moon

2)



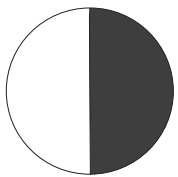
Preview

Become a member to unlock
unrestricted access to both printable
and online worksheets.



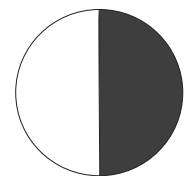


www.tutoringhour.com

5)



waning crescent

6)



waning gibbous