

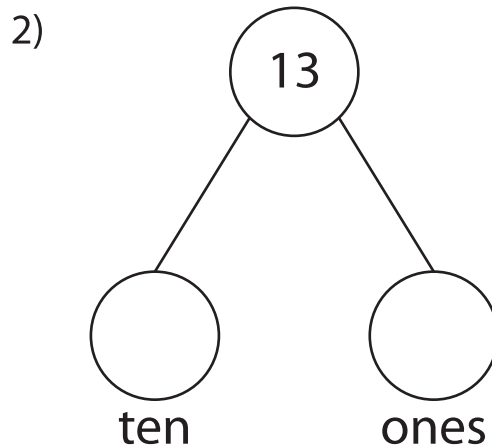
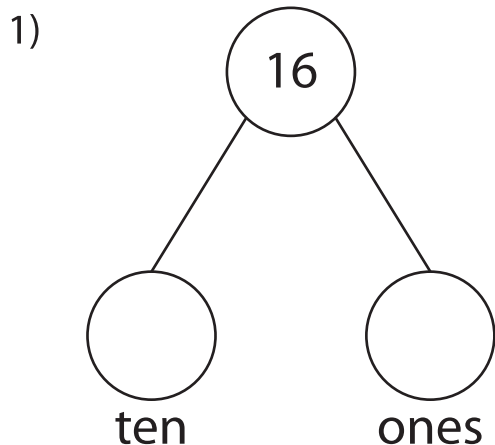
Decomposing Numbers as Tens and Ones

A) Decompose each number, and write how many tens and ones in each.

1) $15 = \underline{\quad}$ ten and $\underline{\quad}$ ones

2) $18 = \underline{\quad}$ ten and $\underline{\quad}$ ones

B) Split each number as tens and ones, and write them in the circles.



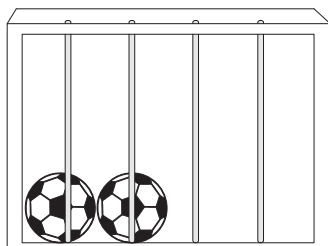
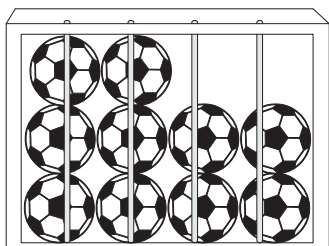
C) Write how many in all, how many tens, and how many ones.

1)



Total	Ten	Ones

2)



Total	Ten	Ones