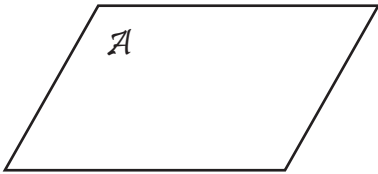


Points, Lines and Planes

State if each figure is a point, plane or line and name it.

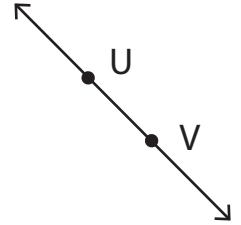
1)



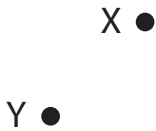
2)



3)



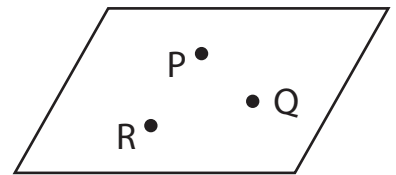
4)



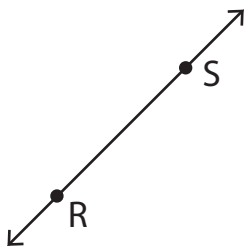
5)



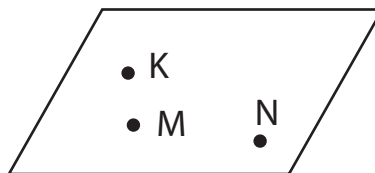
6)



7)



8)



9)

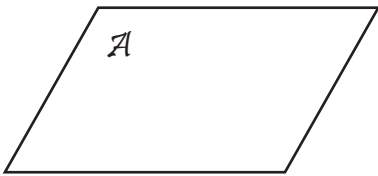


Points, Lines and Planes

Answer key

State if each figure is a point, plane or line and name it.

1)



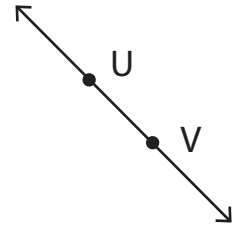
Plane \mathcal{A}

2)



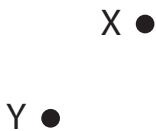
Point B

3)



\overleftrightarrow{UV} or \overleftrightarrow{VU}

4)



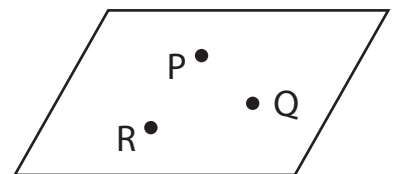
Points X and Y

5)



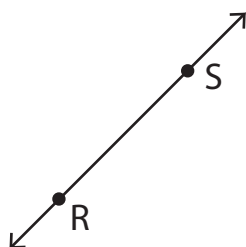
\overleftrightarrow{CD} or \overleftrightarrow{DC}

6)



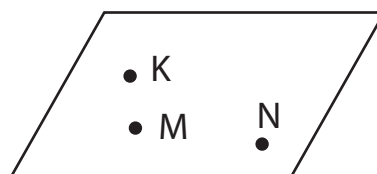
Plane PQR

7)



\overleftrightarrow{RS} or \overleftrightarrow{SR}

8)



Plane KMN

9)



Points T, U and V