

Push and Pull


Read the scenarios and check the appropriate options.

1) Roy and Irene are dragging a box.

Roy is dragging the box on a smooth surface.



Irene is dragging the box on a rough surface.



- a) Roy is using more force than Irene.
- b) Irene is using more force than Roy.

Preview

Become a member to unlock
unrestricted access to both printable
and online worksheets.

www.tutoringhour.com



2) B

Big



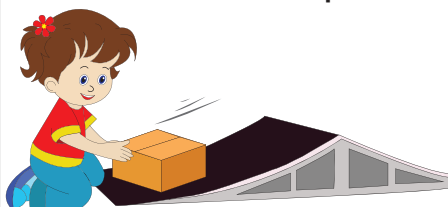
3) M

M
th

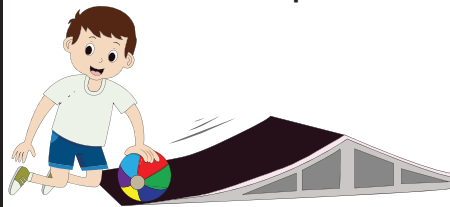


4) Patricia and Paul are moving objects on a ramp.

Patricia is pushing the box on a ramp.



Paul is rolling the ball on a ramp.



- a) The box moves faster.
- b) The ball moves faster.