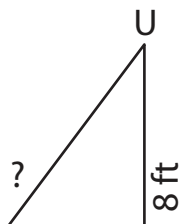


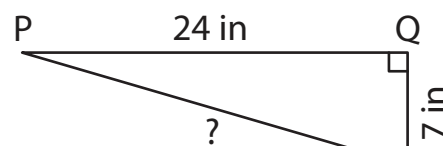
Finding Hypotenuse

Determine the hypotenuse in each right triangle using the Pythagorean theorem.

1)



2)



Preview

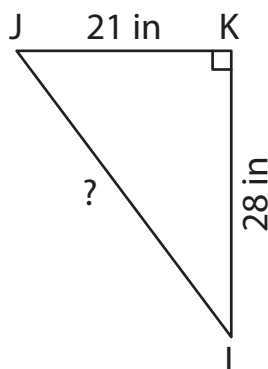
3)

Become a member to unlock
unrestricted access to both printable
and online worksheets.



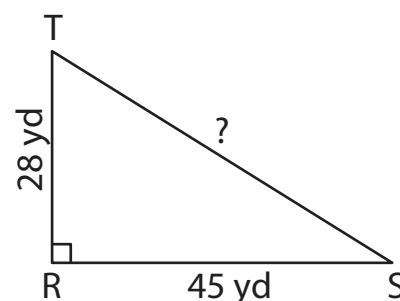
www.tutoringhour.com

5)



JL = _____

6)



TS = _____