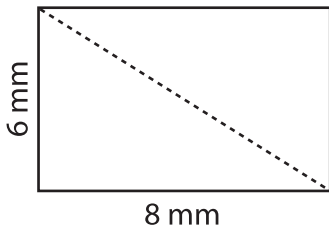


Rectangles | Finding Length of the Diagonal

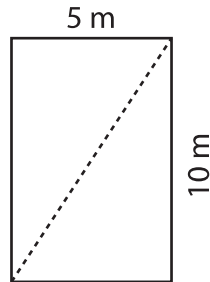
Find the length of the diagonal of each rectangle. Round your answer to the nearest tenth.

1)



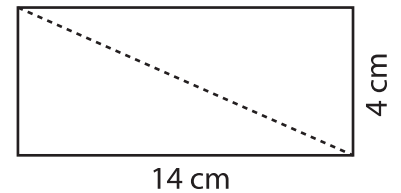
Diagonal = _____

2)



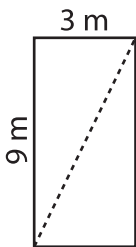
Diagonal = _____

3)



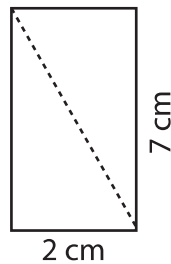
Diagonal = _____

4)



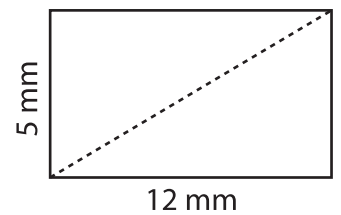
Diagonal = _____

5)



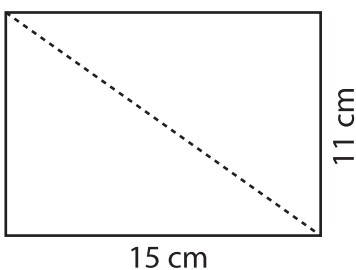
Diagonal = _____

6)



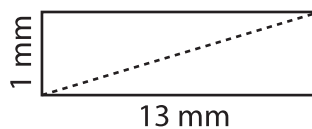
Diagonal = _____

7)



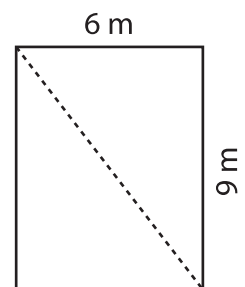
Diagonal = _____

8)



Diagonal = _____

9)



Diagonal = _____