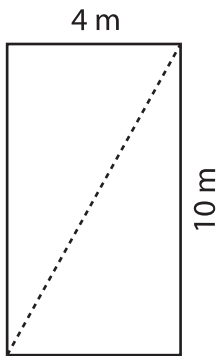


## Rectangles | Finding Length of the Diagonal

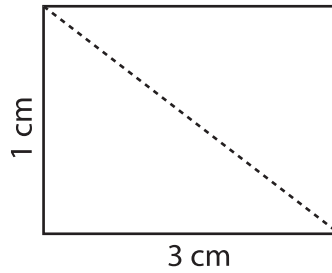
Find the length of the diagonal of each rectangle. Round your answer to the nearest tenth.

1)



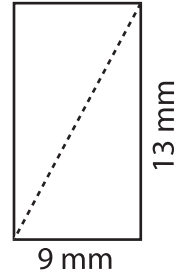
Diagonal = \_\_\_\_\_

2)



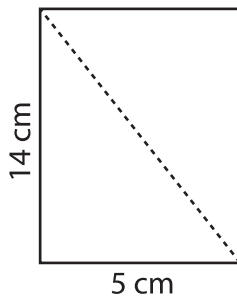
Diagonal = \_\_\_\_\_

3)



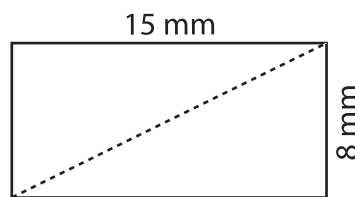
Diagonal = \_\_\_\_\_

4)



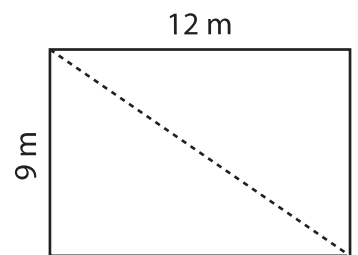
Diagonal = \_\_\_\_\_

5)



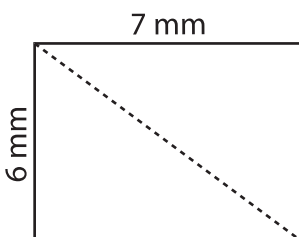
Diagonal = \_\_\_\_\_

6)



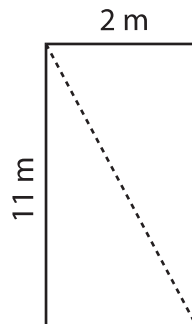
Diagonal = \_\_\_\_\_

7)



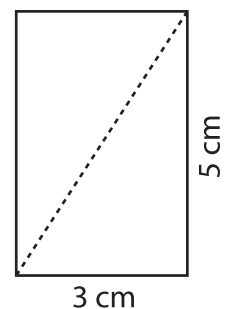
Diagonal = \_\_\_\_\_

8)



Diagonal = \_\_\_\_\_

9)



Diagonal = \_\_\_\_\_