

Skip Counting by 7s

A) Skip count by 7s, and write the missing numbers.

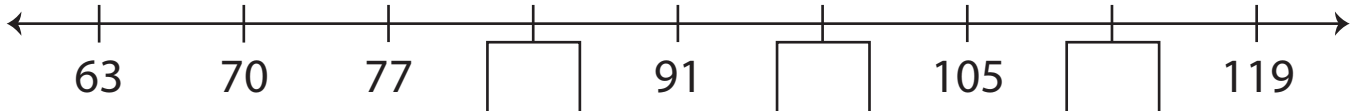
1) 14, 21, 28, _____, _____, _____, _____.

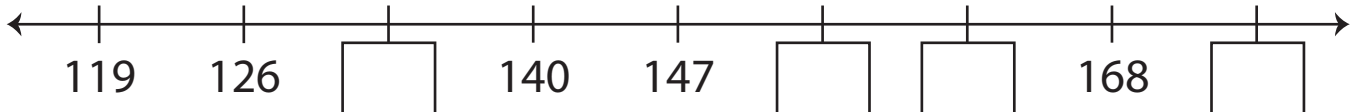
2) 77, 84, 91, _____, _____, _____.

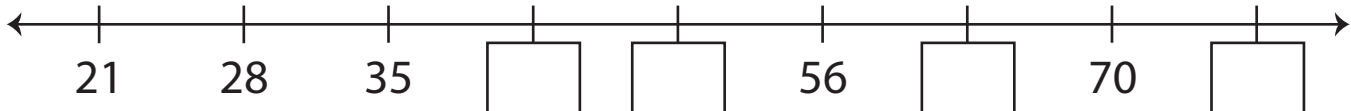
3) 161, 168, 175, _____, _____, _____.

4) 105, 112, 119, _____, _____, _____, _____.

B) Skip count by 7s, and complete each number line.

1) 

2) 

3) 

4) 