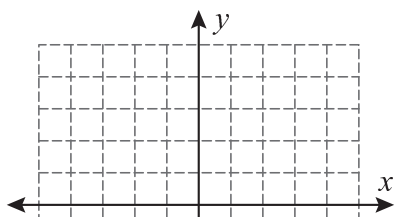


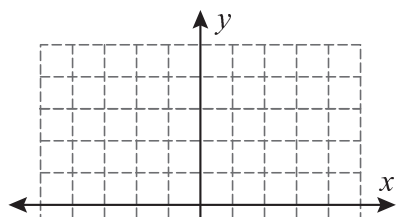
Slope | Graphing

Draw a line through the point for the given slope.

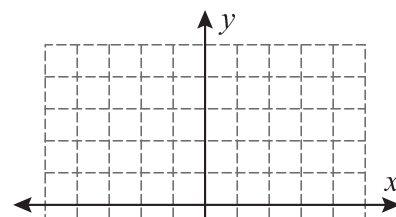
1) Slope = $\frac{2}{3}$



2) Slope = $-\frac{5}{9}$



3) Slope = $\frac{1}{7}$



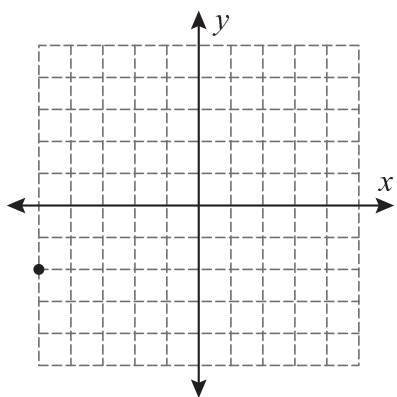
Preview

Become a member to unlock
unrestricted access to both printable
and online worksheets.

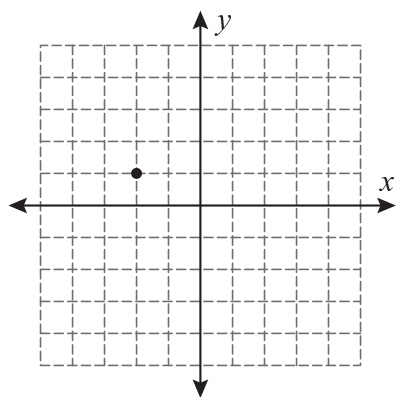


www.tutoringhour.com

7) Slope = $\frac{3}{8}$



8) Slope = $-\frac{4}{5}$



9) Slope = $\frac{9}{2}$

