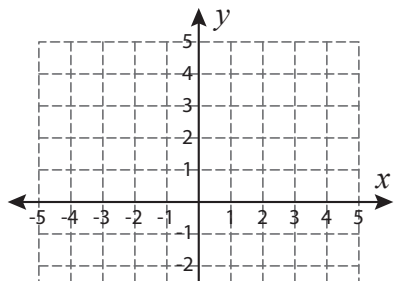


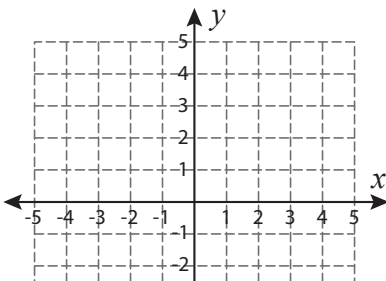
Find the Slope

Graph a line segment by joining the given pair of points. Find the slope.

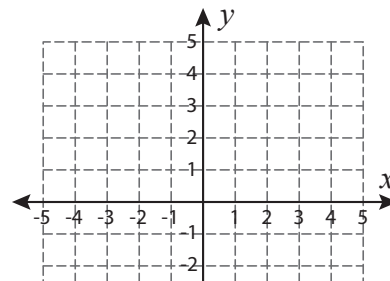
1) $(1, 5)$ and $(4, -2)$



2) $(5, 0)$ and $(0, 1)$



3) $(3, 2)$ and $(-1, -2)$



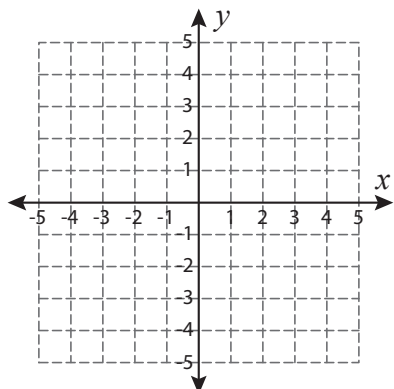
Preview

Become a member to unlock
unrestricted access to both printable
and online worksheets.



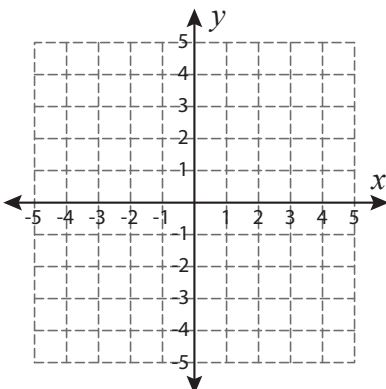
www.tutoringhour.com

7) $(-1, 5)$ and $(2, -1)$



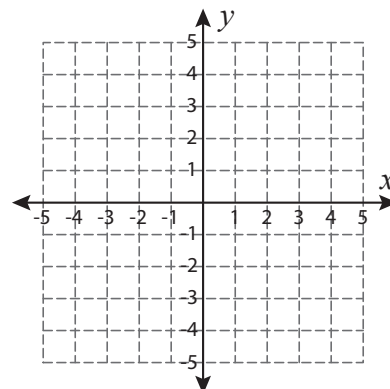
Slope = _____

8) $(-3, 2)$ and $(4, 1)$



Slope = _____

9) $(-4, -2)$ and $(3, 2)$



Slope = _____