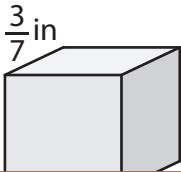


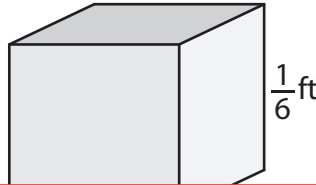
Surface Area of a Cube

Find the surface area of each cube.

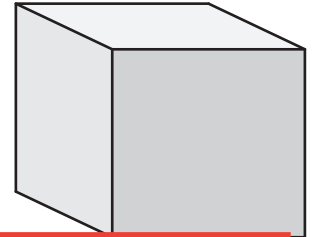
1)



2)



3)



Preview

Become a member to unlock
unrestricted access to both printable
and online worksheets.

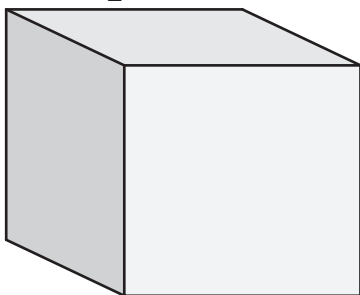


www.tutoringhour.com

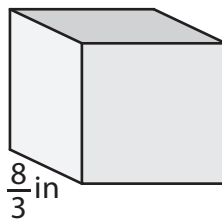
4)

7)

$\frac{7}{2}$ yd



8)



9)

