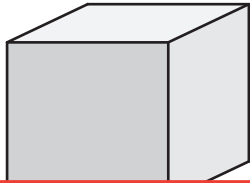


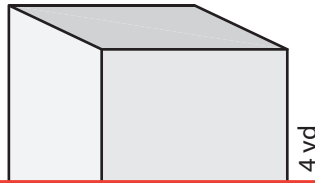
Surface Area of a Cube

Find the surface area of each cube.

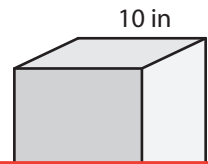
1)



2)



3)



Preview

Become a member to unlock
unrestricted access to both printable
and online worksheets.

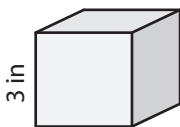


www.tutoringhour.com

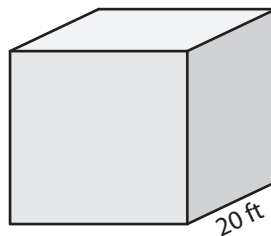
4)

12 yd

7)



8)



9)

