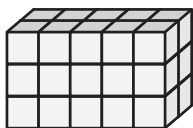


Surface Area | Counting Squares

Find the surface area of each rectangular prism.

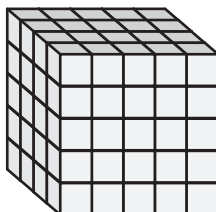
$\square = 1 \text{ in}^2$

1)




Surface Area = _____

2)




Surface Area = _____

3)



Surface Area = _____

4)



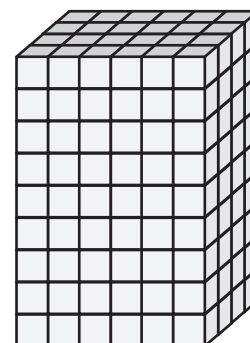
Surface Area = _____

5)



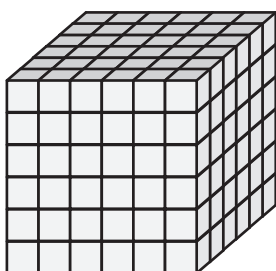
Surface Area = _____

6)



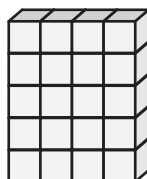
Surface Area = _____

7)



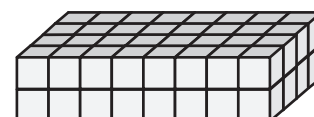
Surface Area = _____

8)



Surface Area = _____

9)



Surface Area = _____

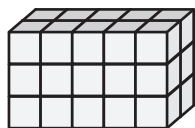
Surface Area | Counting Squares

Answer key

Find the surface area of each rectangular prism.

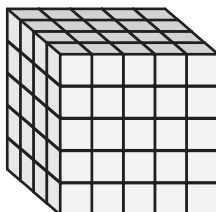
$\square = 1 \text{ in}^2$

1)




Surface Area = 62 in²

2)




Surface Area = 130 in²

3)



Surface Area = 106 in²

4)



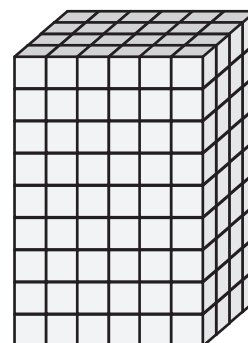
Surface Area = 164 in²

5)



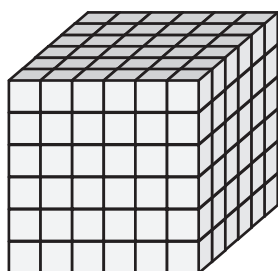
Surface Area = 88 in²

6)



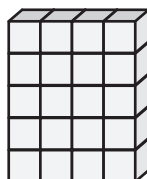
Surface Area = 228 in²

7)



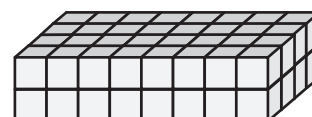
Surface Area = 216 in²

8)



Surface Area = 58 in²

9)



Surface Area = 112 in²