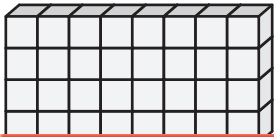


Surface Area | Counting Squares

Find the surface area of each rectangular prism.

$\square = 1 \text{ yd}^2$

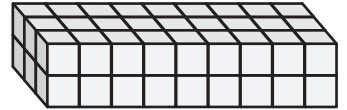
1)



2)



3)



Surface Area = _____

4)

Preview

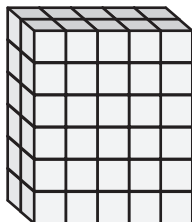
Become a member to unlock
unrestricted access to both printable
and online worksheets.



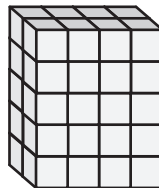
Surface Area = _____

www.tutoringhour.com

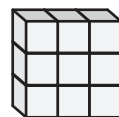
7)



8)



9)



Surface Area = _____

Surface Area = _____

Surface Area = _____