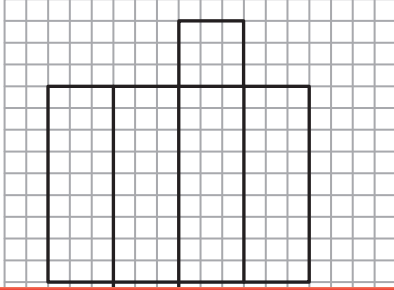


# Surface Area of 3D Figures Using Nets

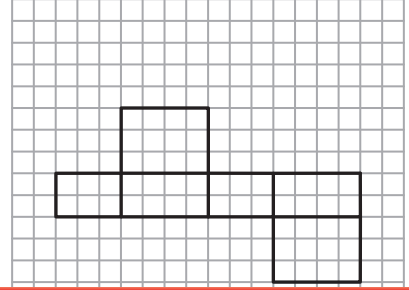
Count the squares and find the surface area of each shape represented by its net.

$$\square = 1 \text{ ft}^2$$

1) Rectangular Prism



2) Rectangular Prism




## Preview

Become a member to unlock  
unrestricted access to both printable  
and online worksheets.



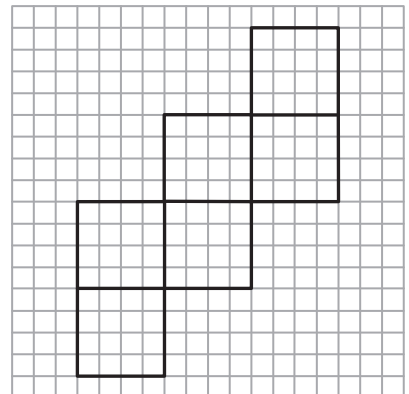
www.tutoringhour.com

5) Rectangular Prism



Surface Area = \_\_\_\_\_

6) Cube



Surface Area = \_\_\_\_\_