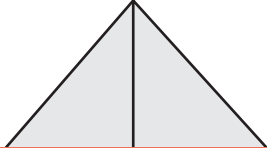

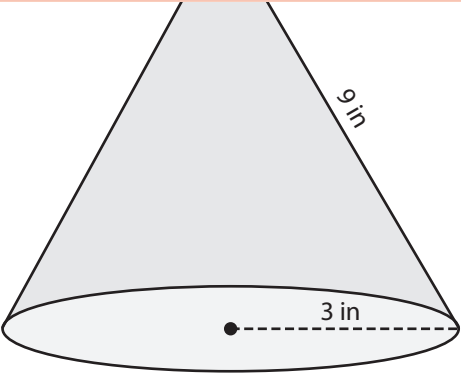


Surface Area of Solids Using Nets

Draw the net to represent each solid figure, and find the surface area. Use 3.14 for π .

Shape	Net
	
<div style="border: 2px solid red; padding: 10px;"> <h2 style="color: blue; font-size: 2em;">Preview</h2> <p style="color: blue; font-size: 1.2em;">Become a member to unlock unrestricted access to both printable and online worksheets.</p> <p style="color: blue;">www.tutoringhour.com</p>  </div>	
	<p>Surface Area: _____</p>