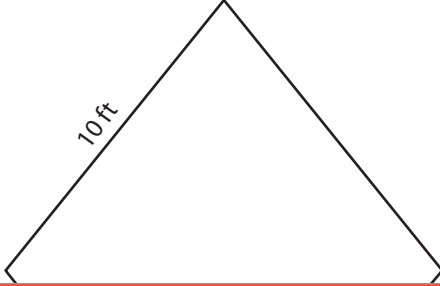


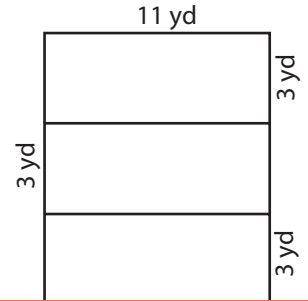
# Surface Area of 3D Figures Using Nets

Identify the shape that each net represents, and find its surface area. Round your answer to two decimal places. (Use 3.14 for  $\pi$ .)

1)



2)



## Preview

Become a member to unlock  
unrestricted access to both printable  
and online worksheets.

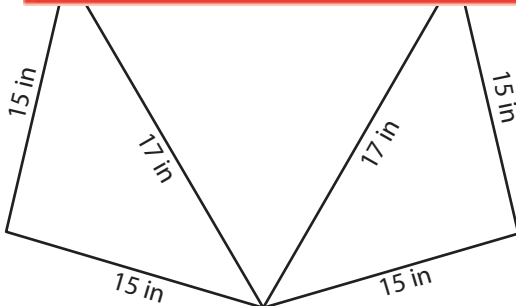
www.tutoringhour.com



i)

ii)

3)

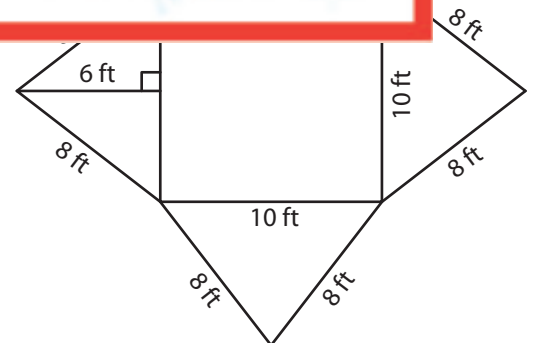


i) What is the shape?

---

ii) What is the surface area of the figure?

---



i) What is the shape?

---

ii) What is the surface area of the figure?

---