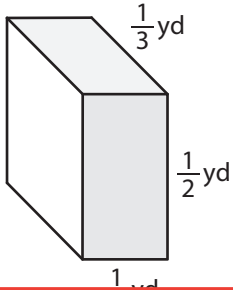


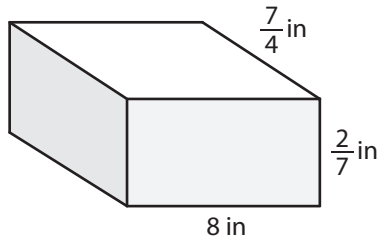
Surface Area of a Rectangular Prism

Find the surface area of each rectangular prism.

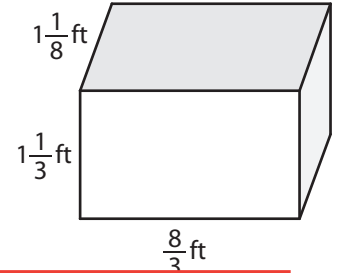
1)



2)



3)



Preview

Become a member to unlock
unrestricted access to both printable
and online worksheets.



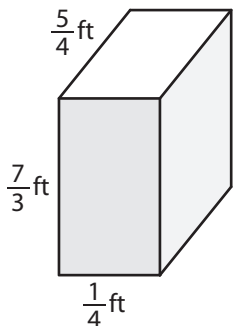
www.tutoringhour.com

4)

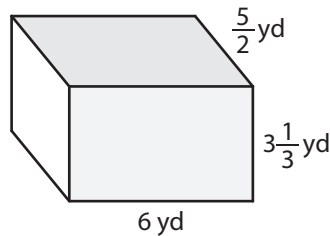
$1\frac{1}{5}$

$\frac{2}{3}$ yd

7)



8)



9)

