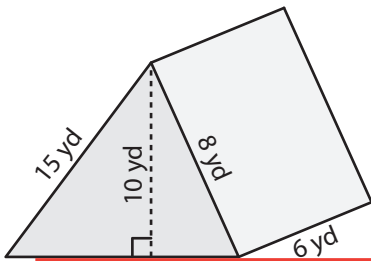


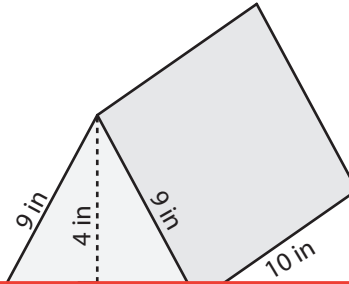
# Surface Area of a Triangular Prism

Find the surface area of each triangular prism.

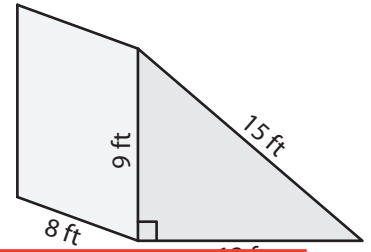
1)



2)



3)



# Preview

Become a member to unlock  
unrestricted access to both printable  
and online worksheets.



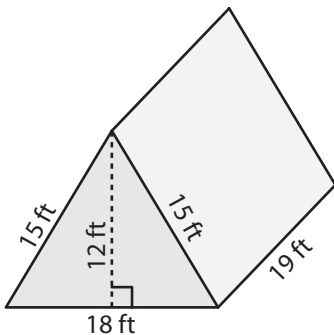
[www.tutoringhour.com](http://www.tutoringhour.com)

4)

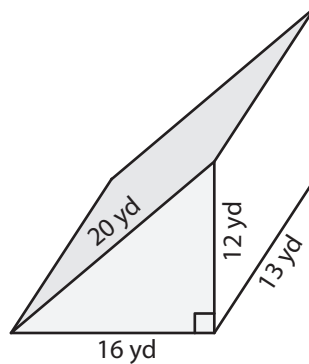
6 in

2 yd

7)



8)



9)

