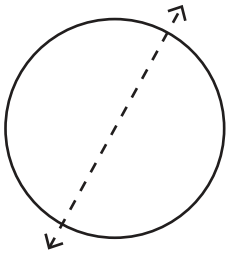


Symmetry

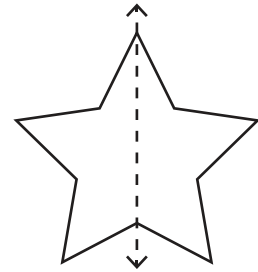
Is the dotted line on each shape a line of symmetry or not?

1)



It is a line of symmetry.

2)



It is a line of symmetry.

3)

Preview

Become a member to unlock
unrestricted access to both printable
and online worksheets.



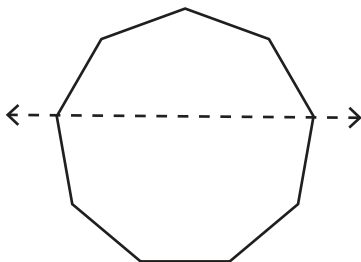
www.tutoringhour.com

5)

It is a line of symmetry.
 It is not a line of symmetry.

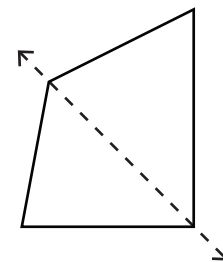
It is a line of symmetry.
 It is not a line of symmetry.

7)



It is a line of symmetry.
 It is not a line of symmetry.

8)



It is a line of symmetry.
 It is not a line of symmetry.