


# Symmetry

What will be the shape at the center when you unfold the paper?

1)



2)



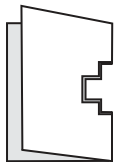
3)

**Become a member to unlock  
unrestricted access to both printable  
and online worksheets.**



[www.tutoringhour.com](http://www.tutoringhour.com)

5)



a)

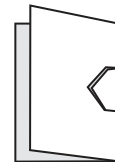


b)



c)

6)



a)



b)



c)