











Tally Marks | Shoe Store

Mindy works in a shoe store in Philadelphia. The tally chart shows how many pairs of shoes of each type were sold by Mindy on Sunday. Use the information from the tally chart to answer the questions.

Items	Tally Marks
 <p data-bbox="443 696 592 741">Wedges</p>	
 <p data-bbox="443 853 600 898">Sneakers</p>	
 <p data-bbox="435 1010 608 1055">Flip Flops</p>	
 <p data-bbox="467 1167 572 1211">Boots</p>	
 <p data-bbox="411 1323 628 1368">Dress Shoes</p>	

- 1) How many wedges were sold by Mindy? _____
- 2) Which was the most popular shoe type? _____
- 3) How many pairs of dress shoes did Mindy sell on Sunday? _____
- 4) How many pairs of shoes did she manage to sell in total? _____
- 5) Which type of foot wear was sold the least? _____