
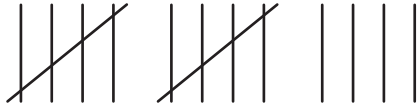

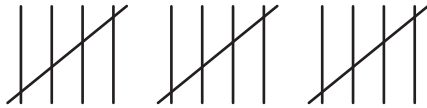




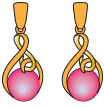



Tally Marks | The Accessories Store

Natalie is the store manager at the “The Accessories Store”. She records the different types of accessories sold on Monday morning in a tally chart. Interpret the tally chart and answer the questions.

Items	Tally Marks
 Hats	
 Sunglasses	
 Handbags	
 Watches	
 Earrings	

- 1) How many hats were sold? _____
- 2) On Monday morning, how many items were sold in total? _____
- 3) How many pairs of earrings and handbags were sold? _____
- 4) Which item was sold the least? _____
- 5) How many more sunglasses were sold than handbags? _____