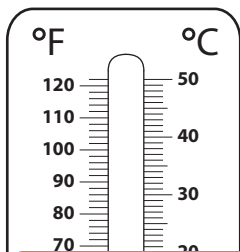
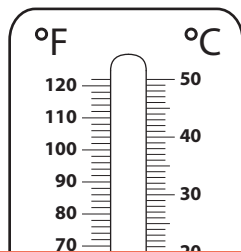
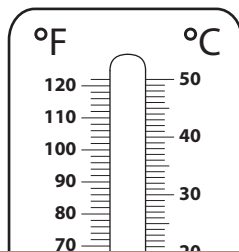
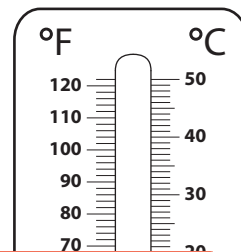


Converting Temperatures | Celsius to Fahrenheit

Color to depict the given °C temperature on each thermometer, and write its equivalent in °F.

1) $-20\text{ }^{\circ}\text{C}$ 2) $35\text{ }^{\circ}\text{C}$ 3) $25\text{ }^{\circ}\text{C}$ 4) $-40\text{ }^{\circ}\text{C}$ 

Preview

Become a member to unlock
unrestricted access to both printable
and online worksheets.


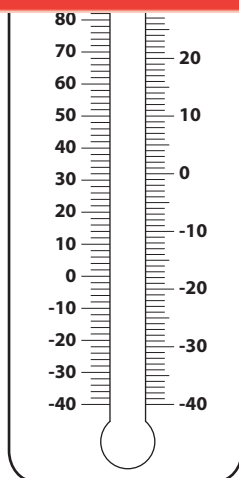
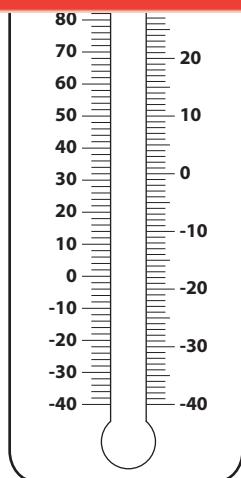
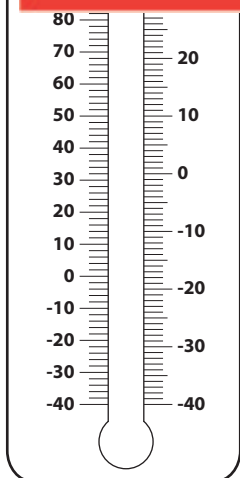
www.tutoringhour.com



-20 °

5)

°F



$-30\text{ }^{\circ}\text{C} = \underline{\hspace{2cm}}\text{ }^{\circ}\text{F}$ $-15\text{ }^{\circ}\text{C} = \underline{\hspace{2cm}}\text{ }^{\circ}\text{F}$ $50\text{ }^{\circ}\text{C} = \underline{\hspace{2cm}}\text{ }^{\circ}\text{F}$ $10\text{ }^{\circ}\text{C} = \underline{\hspace{2cm}}\text{ }^{\circ}\text{F}$