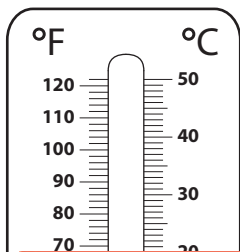


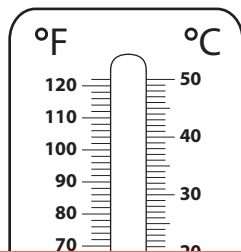
Converting Temperatures | Celsius to Fahrenheit

Color to depict the given °C temperature on each thermometer, and write its equivalent in °F.

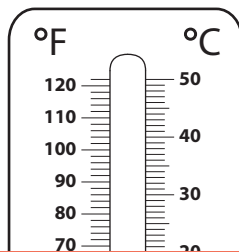
1) 15 °C



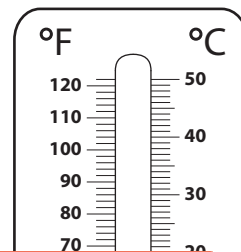
2) -40 °C



3) 30 °C



4) -25 °C



Preview


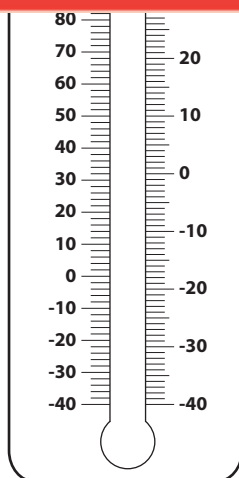
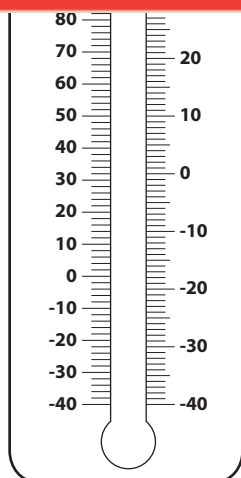
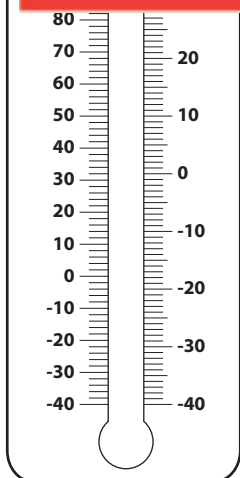
Become a member to unlock
unrestricted access to both printable
and online worksheets.

www.tutoringhour.com

15 °

5)

°F



-5 °C = _____ °F

10 °C = _____ °F

40 °C = _____ °F

-35 °C = _____ °F