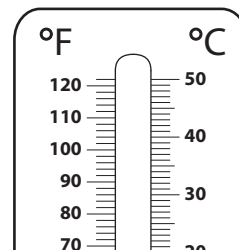
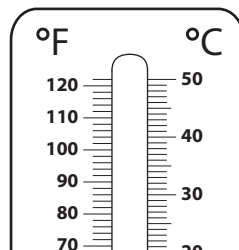
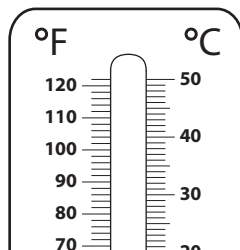
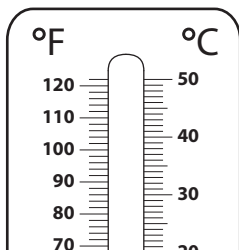


## Converting Temperatures | Fahrenheit to Celsius

Color to depict the given °F temperature on each thermometer, and write its equivalent in °C.

1)  $-31\text{ }^{\circ}\text{F}$ 2)  $104\text{ }^{\circ}\text{F}$ 3)  $41\text{ }^{\circ}\text{F}$ 4)  $23\text{ }^{\circ}\text{F}$ 

# Preview

Become a member to unlock  
unrestricted access to both printable  
and online worksheets.




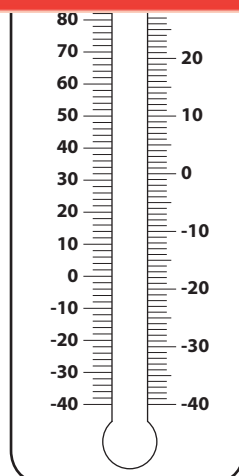
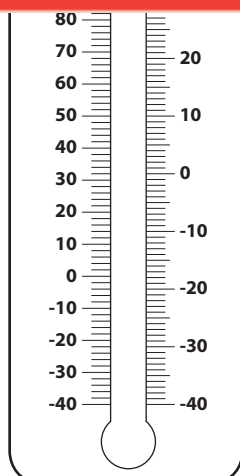
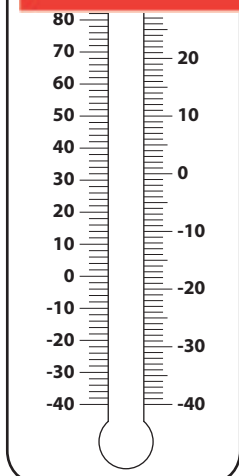
[www.tutoringhour.com](http://www.tutoringhour.com)

-31 °

5) 1

°C

°C



14 °F = \_\_\_\_\_ °C

86 °F = \_\_\_\_\_ °C

-13 °F = \_\_\_\_\_ °C

95 °F = \_\_\_\_\_ °C