


# Rise and Fall in Temperatures

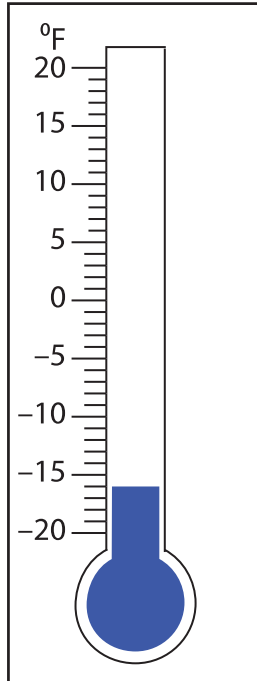
Find the new reading if the temperature

1) falls by  $11^{\circ}\text{C}$ .



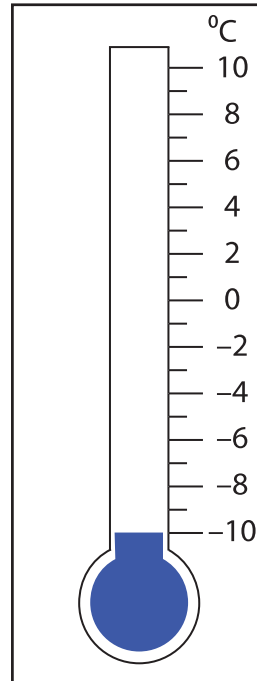
\_\_\_\_\_

2) rises by  $34^{\circ}\text{F}$ .



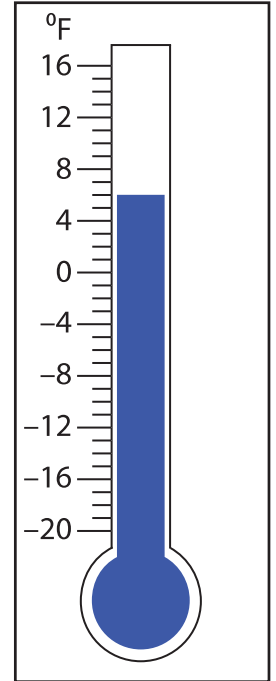
\_\_\_\_\_

3) rises by  $9^{\circ}\text{C}$ .



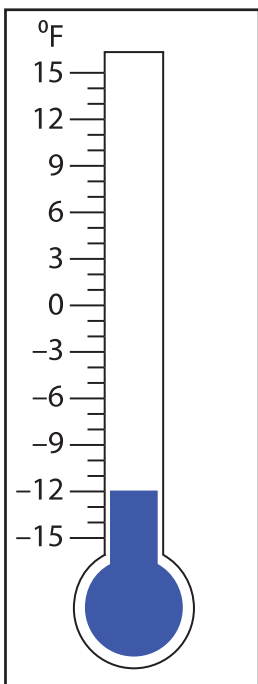
\_\_\_\_\_

4) falls by  $22^{\circ}\text{F}$ .



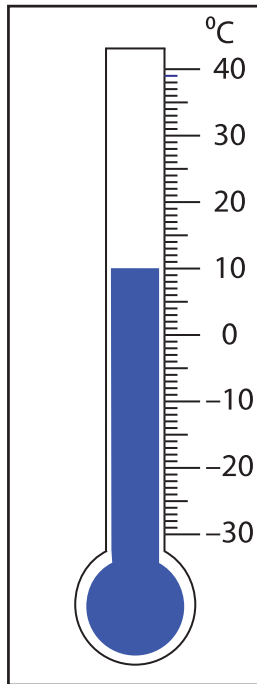
\_\_\_\_\_

5) rises by  $27^{\circ}\text{F}$ .



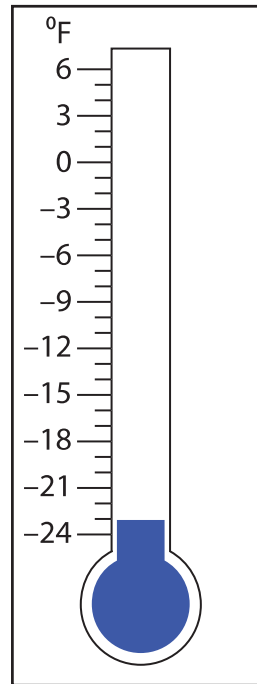
\_\_\_\_\_

6) falls by  $30^{\circ}\text{C}$ .



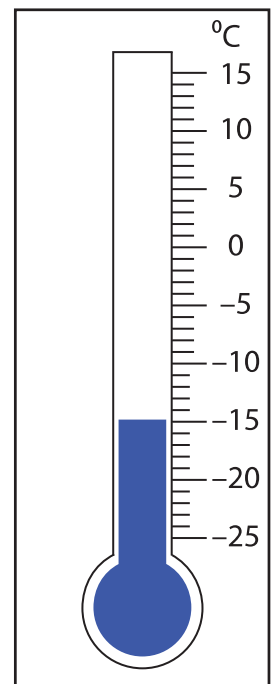
\_\_\_\_\_

7) rises by  $19^{\circ}\text{F}$ .



\_\_\_\_\_

8) falls by  $2^{\circ}\text{C}$ .



\_\_\_\_\_