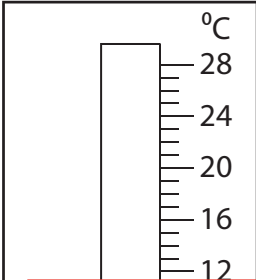


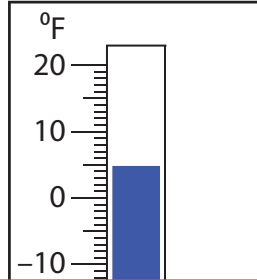
Rise and Fall in Temperatures

Find the new reading if the temperature

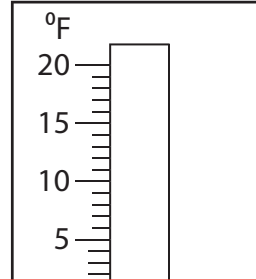
1) rises by 4°C .



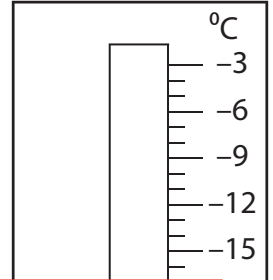
2) falls by 35°F .



3) falls by 6°F .



4) rises by 13°C .



Preview

Become a member to unlock
unrestricted access to both printable
and online worksheets.



www.tutoringhour.com

5) falls by 10°C .

