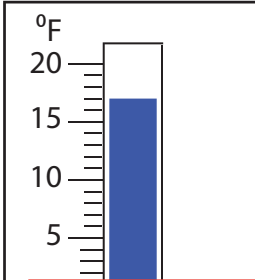


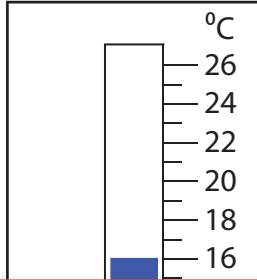
Rise and Fall in Temperatures

Find the new reading if the temperature

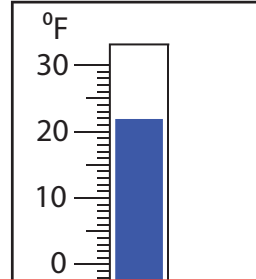
1) falls by 30°F .



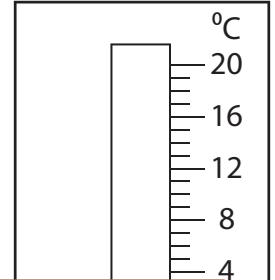
2) falls by 13°C .



3) falls by 48°F .



4) rises by 29°C .



Preview

Become a member to unlock
unrestricted access to both printable
and online worksheets.



www.tutoringhour.com

5) ri

