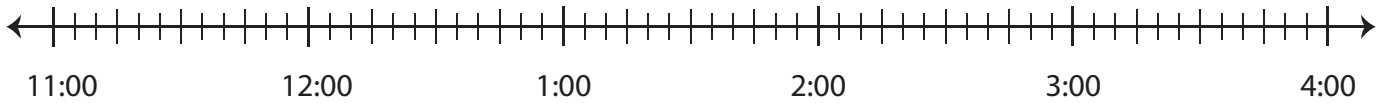


# Elapsed Time

Draw hops on each number line and find the elapsed time.

- 1) Start time: 1:00 a.m. End time: 2:50 a.m.



Elapsed time: \_\_\_\_\_

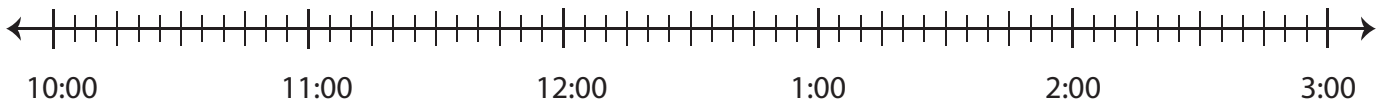
- 2) S



- 3) S

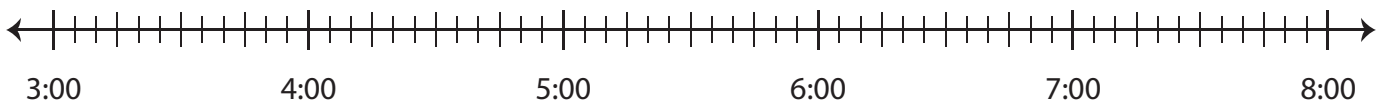


- 4) S



Elapsed time: \_\_\_\_\_

- 5) Start time: 4:10 p.m. End time: 7:10 p.m.



Elapsed time: \_\_\_\_\_

**Preview**

**Become a member to unlock  
unrestricted access to both printable  
and online worksheets.**



[www.tutoringhour.com](http://www.tutoringhour.com)