


Estimating Time

Estimate the time required for each action and check the correct option.

- 1) It would take Little Alicia _____ to sharpen the pencil lead.



- less than a minute
 more than a minute

- 2) It would take the detailer _____ to water wash the motorbike.



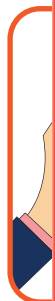
- less than a minute
 more than a minute

Preview


Become a member to unlock
unrestricted access to both printable
and online worksheets.

www.tutoringhour.com

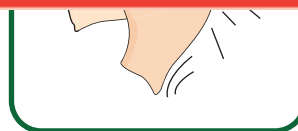
- 3) It v
po



- 5) It v
bre



- more than a minute



- more than a minute

- 7) It would take Anthony _____ to take the pill.



- less than a minute
 more than a minute

- 8) It would take Velma _____ to blow-dry her hair.



- less than a minute
 more than a minute