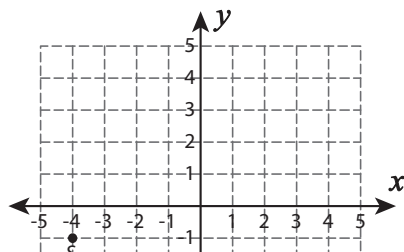


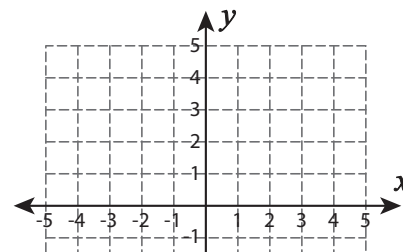
Reflecting a Point

Graph the new position of each point after the given reflection.

1) Reflection across the line $x = -1$



2) Reflection across the line $y = -2$



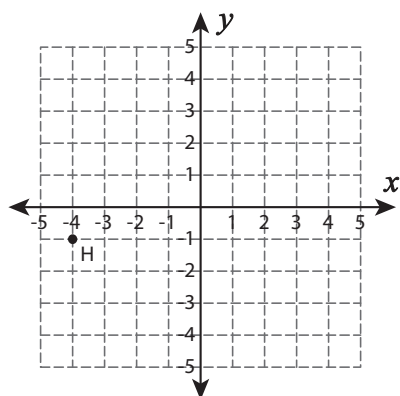
Preview

Become a member to unlock
unrestricted access to both printable
and online worksheets.



www.tutoringhour.com

5) Reflection across the line $y = -x$



6) Reflection across the line $x = 2$

