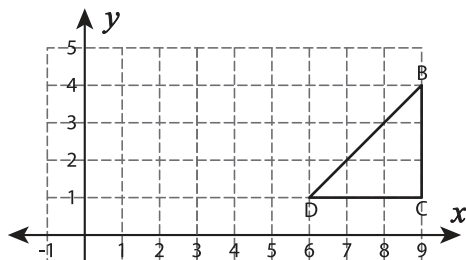


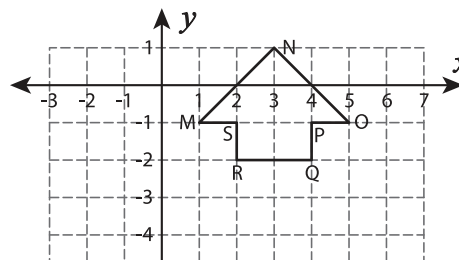
# Reflection of Shapes

Graph each shape after reflecting it as directed.

- 1) Reflection across the line  $x = 5$



- 2) Reflection across the line  $y = -4$



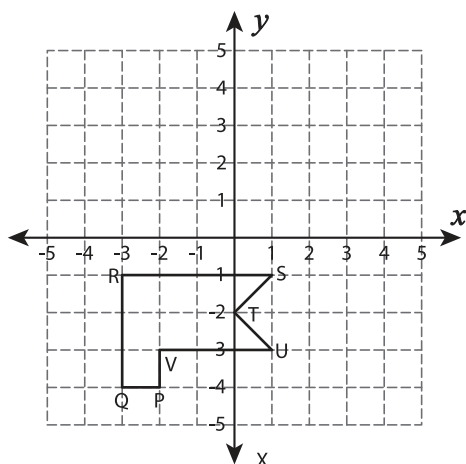
# Preview

Become a member to unlock  
unrestricted access to both printable  
and online worksheets.



[www.tutoringhour.com](http://www.tutoringhour.com)

- 5) Reflection across the x-axis



- 6) Reflection across the line  $x = 2$

