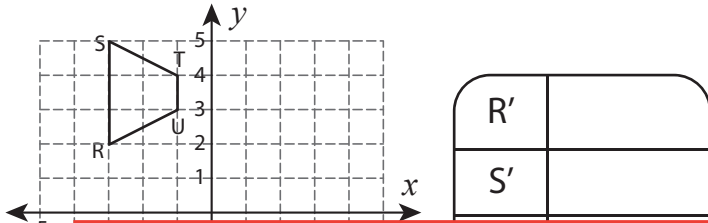


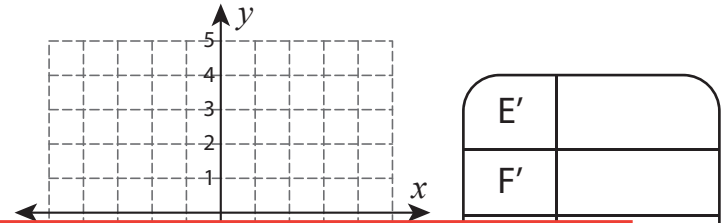
Reflection | Writing the Coordinates

Graph the image of each figure after the given reflection. Also write the coordinates of the image.

1) Reflection across the x-axis



2) Reflection across the line $y = -x$



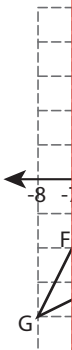
Preview

Become a member to unlock
unrestricted access to both printable
and online worksheets.

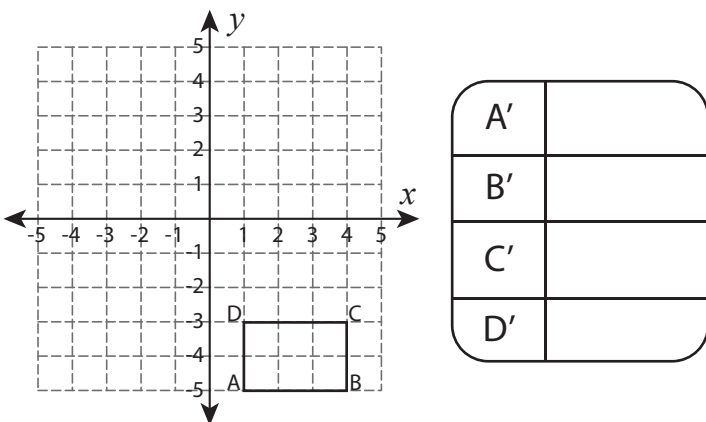


www.tutoringhour.com

3) Ref



5) Reflection across the line $y = -1$



6) Reflection across the line $y = 3$

