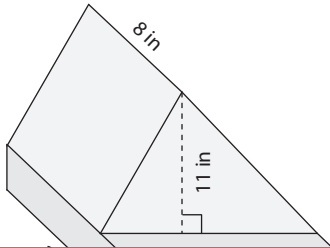


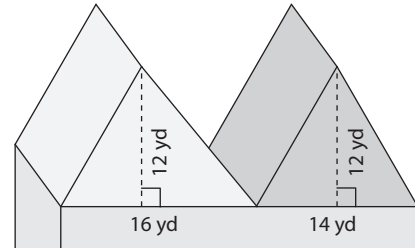
# Volume of Composite Shapes

Find the volume of each solid shape. Round your answer to two decimal places. (Use 3.14 for  $\pi$ .)

1)



2)



3)

16 ft

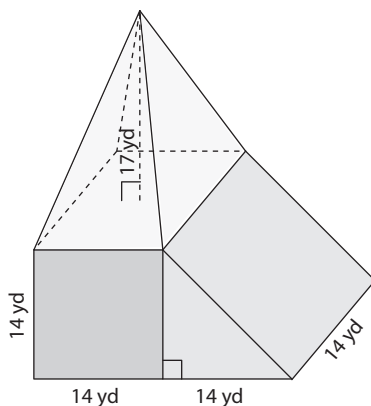
# Preview

Become a member to unlock  
unrestricted access to both printable  
and online worksheets.



www.tutoringhour.com

5)



6)

