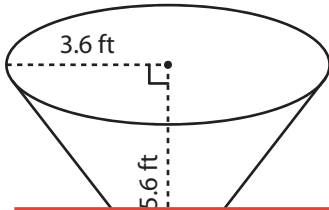


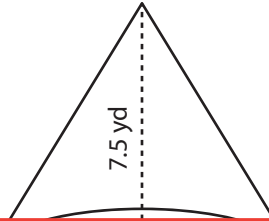
# Volume of a Cone

Find the volume of each cone. Round your answer to two decimal places.  
(Use 3.14 for  $\pi$ )

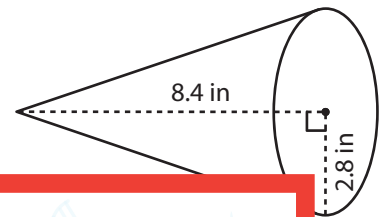
1)



2)



3)



4)

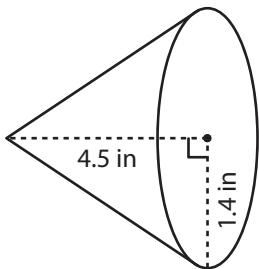
# Preview

Become a member to unlock  
unrestricted access to both printable  
and online worksheets.

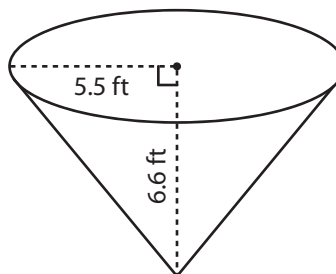


[www.tutoringhour.com](http://www.tutoringhour.com)

7)



8)



9)

