
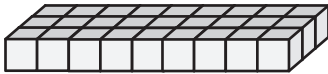


Volume | Counting Unit Cubes

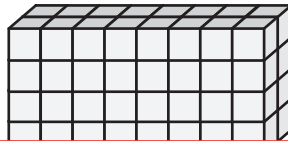
Count the unit cubes and find the volume of each rectangular prism.

 = 1 in³

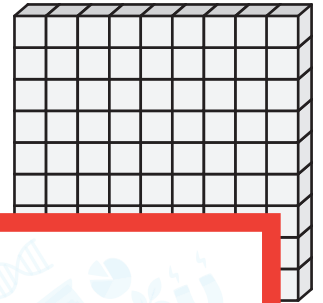
1)



2)



3)



Vol

Preview

4)


Become a member to unlock
unrestricted access to both printable
and online worksheets.




Vol

www.tutoringhour.com

7)



8)



9)



Volume = _____

Volume = _____

Volume = _____