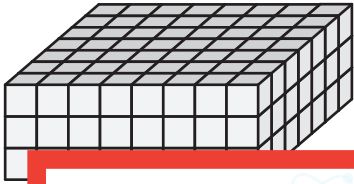


Volume | Counting Unit Cubes

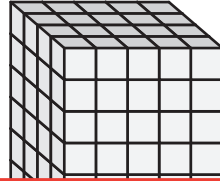
Count the unit cubes and find the volume of each rectangular prism.

$$\text{1 unit cube} = 1 \text{ ft}^3$$

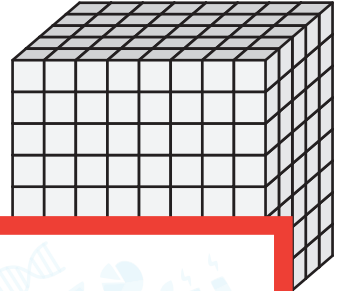
1)



2)



3)



Vol

Preview

4)


Become a member to unlock
unrestricted access to both printable
and online worksheets.



Vol


www.tutoringhour.com

7)



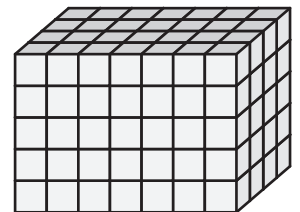
Volume = _____

8)



Volume = _____

9)



Volume = _____