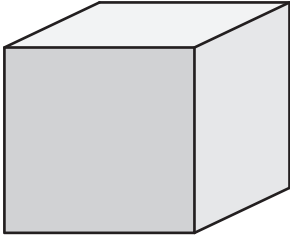


Volume of a Cube

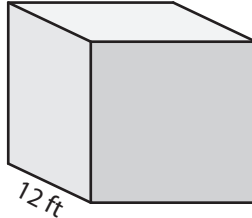
Find the volume of each cube.

1)



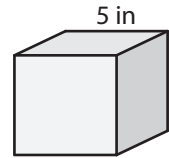
3 yd

2)



12 ft

3)



5 in

4)

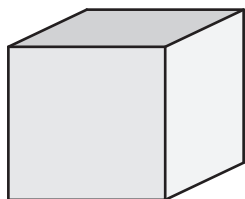
Preview

Become a member to unlock
unrestricted access to both printable
and online worksheets.



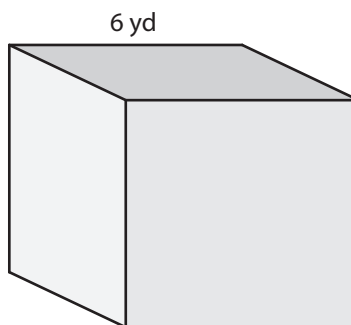
www.tutoringhour.com

7)



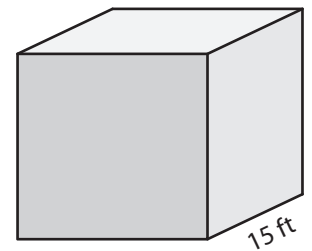
10 in

8)



6 yd

9)



15 ft