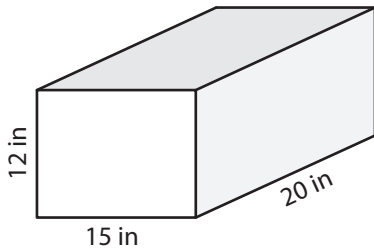


Volume of a Rectangular Prism

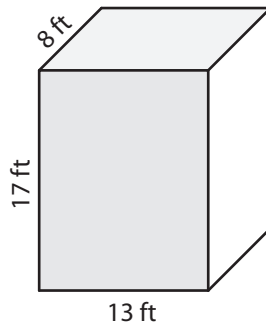
Find the volume of each rectangular prism.

1)



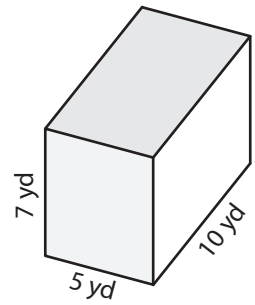
Volume = _____

2)



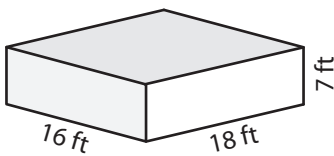
Volume = _____

3)



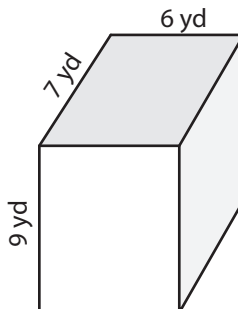
Volume = _____

4)



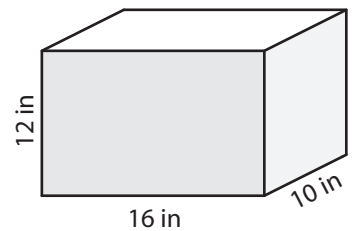
Volume = _____

5)



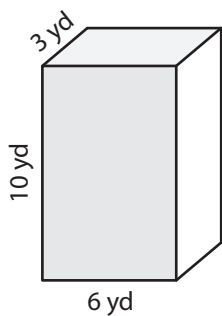
Volume = _____

6)



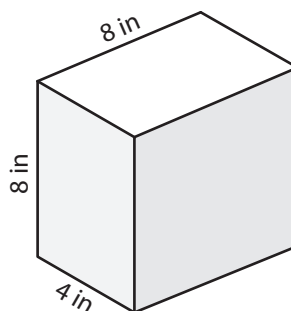
Volume = _____

7)



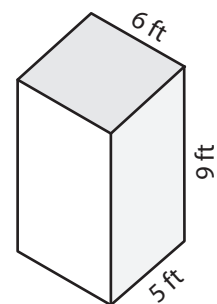
Volume = _____

8)



Volume = _____

9)



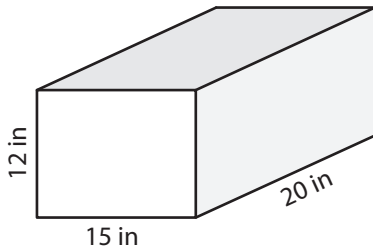
Volume = _____

Volume of a Rectangular Prism

Answer key

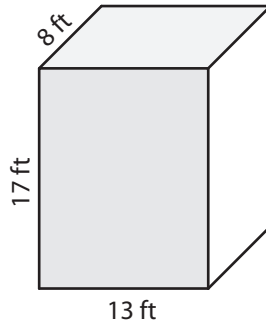
Find the volume of each rectangular prism.

1)



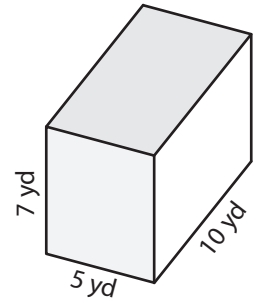
Volume = 3,600 in³

2)



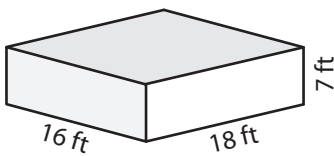
Volume = 1,768 ft³

3)



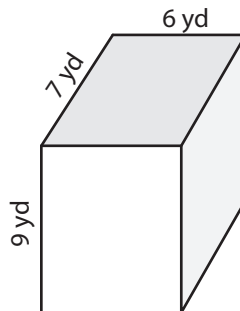
Volume = 350 yd³

4)



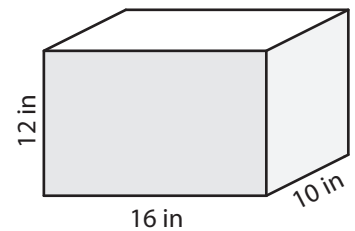
Volume = 2,016 ft³

5)



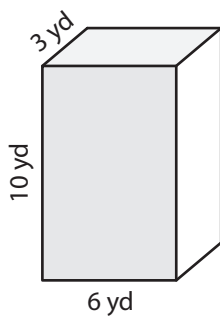
Volume = 378 yd³

6)



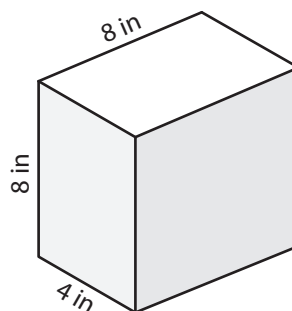
Volume = 1,920 in³

7)



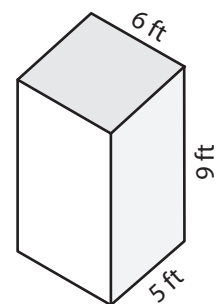
Volume = 180 yd³

8)



Volume = 256 in³

9)



Volume = 270 ft³