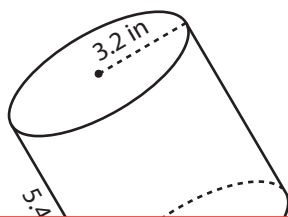


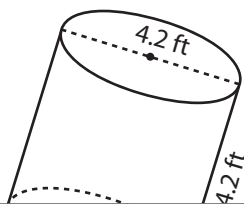
# Volume of a Cylinder

Find the volume of each cylinder. Round your answer to two decimal places. (Use 3.14 for  $\pi$ .)

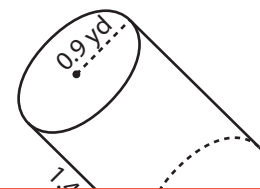
1)



2)



3)



4)

9.5 yd

# Preview

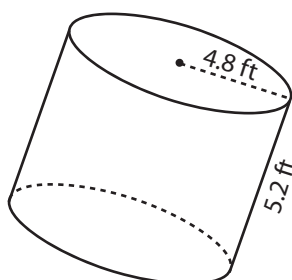
Become a member to unlock  
unrestricted access to both printable  
and online worksheets.



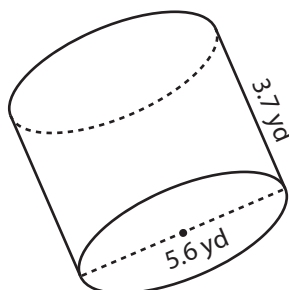
www.tutoringhour.com

6.3 ft

7)



8)



9)

