


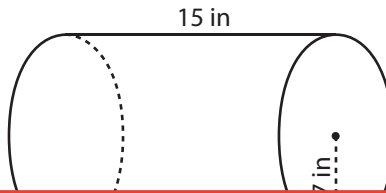
# Volume of a Cylinder

Find the volume of each cylinder. Round your answer to two decimal places. (Use 3.14 for  $\pi$ .)

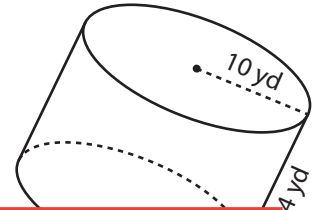
1)



2)



3)



4)

# Preview

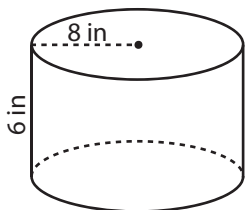
Become a member to unlock  
unrestricted access to both printable  
and online worksheets.



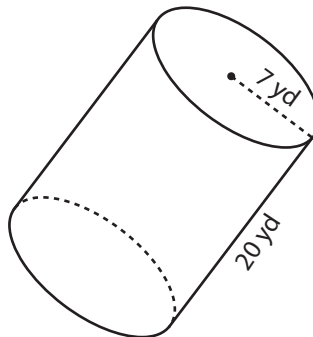
[www.tutoringhour.com](http://www.tutoringhour.com)

12 in

7)



8)



9)

