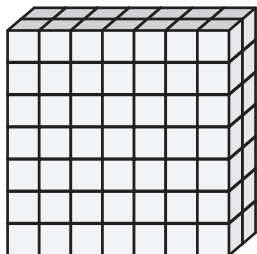


Volume | Counting Unit Cubes

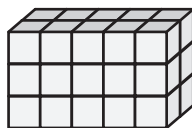
Count the unit cubes and find the volume of each rectangular prism.

1)



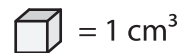

Volume = _____

2)



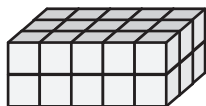
Volume = _____

3)

= 1 cm³

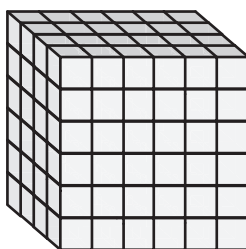
Volume = _____

4)



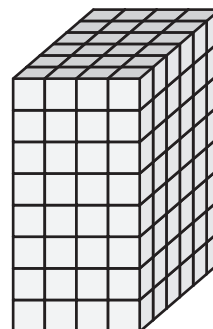
Volume = _____

5)



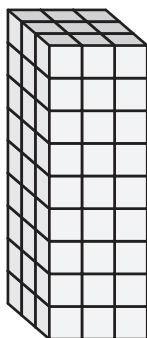
Volume = _____

6)



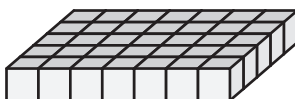
Volume = _____

7)



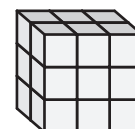
Volume = _____

8)



Volume = _____

9)



Volume = _____