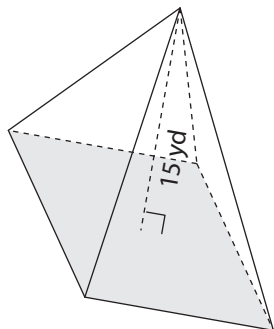


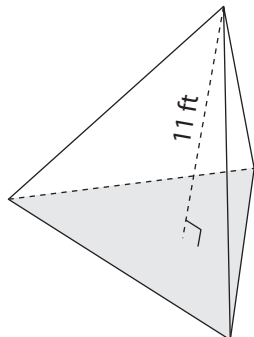
Volume of a Pyramid

Find the volume of each pyramid. Round your answer to two decimal places.

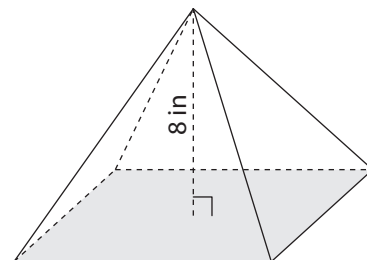
1) Base area = 74 yd^2



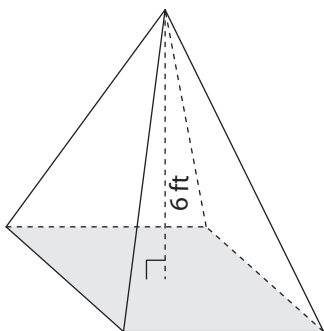
2) Base area = 137 ft^2



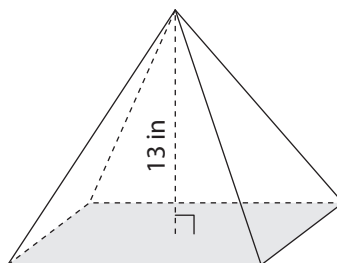
3) Base area = 111 in^2



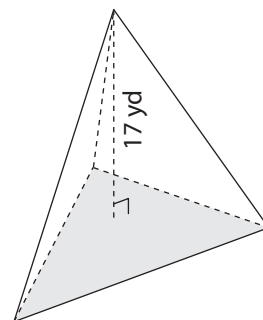
4) Base area = 95 ft^2



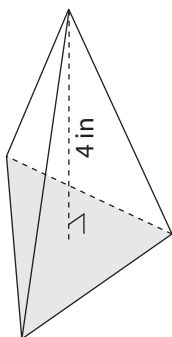
5) Base area = 66 in^2



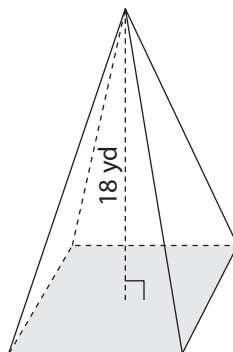
6) Base area = 103 yd^2



7) Base area = 159 in^2



8) Base area = 125 yd^2



9) Base area = 89 ft^2

