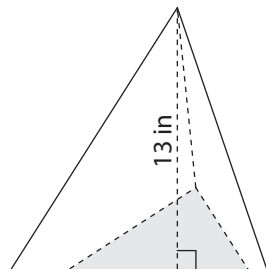


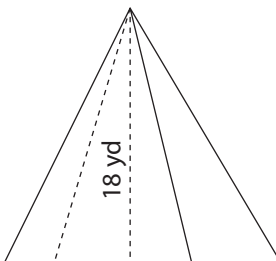
Volume of a Pyramid

Find the volume of each pyramid. Round your answer to two decimal places.

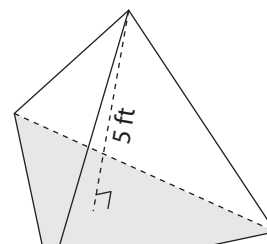
1) Base area = 67 in^2



2) Base area = 129 yd^2



3) Base area = 84 ft^2



Preview

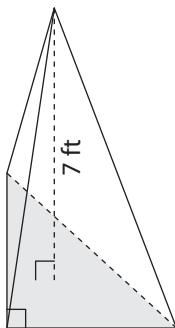
4) Ba

Become a member to unlock
unrestricted access to both printable
and online worksheets.

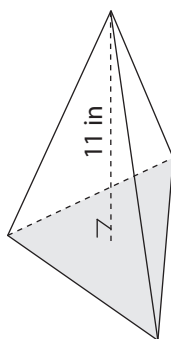


www.tutoringhour.com

7) Base area = 96 ft^2



8) Base area = 247 in^2



9) Base area = 186 yd^2

