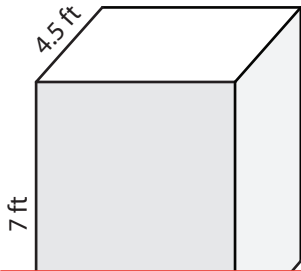


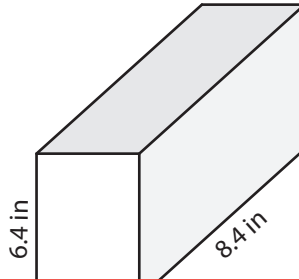
Volume of a Rectangular Prism

Find the volume of each rectangular prism. Round your answer to two decimal places.

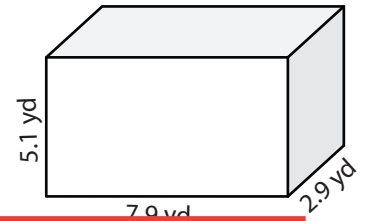
1)



2)



3)



4)

4.2 yd

Preview

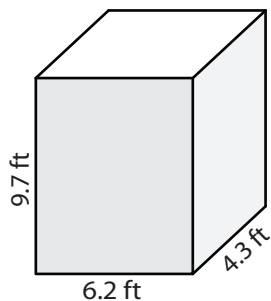
Become a member to unlock
unrestricted access to both printable
and online worksheets.



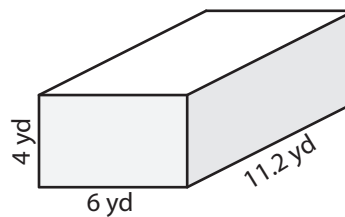
www.tutoringhour.com

8 ft

7)



8)



9)

