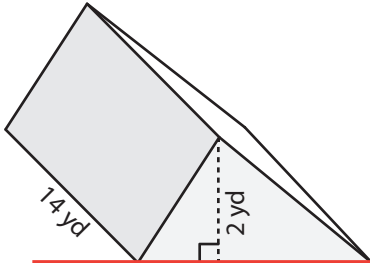


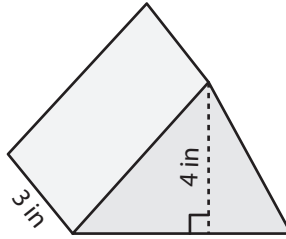
# Volume of a Triangular Prism

Find the volume of each triangular prism.

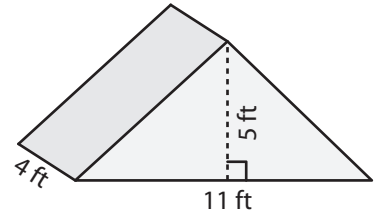
1)



2)



3)



4)

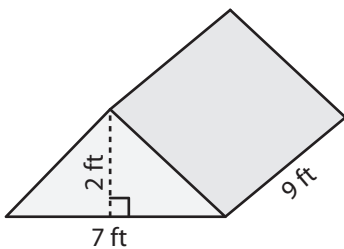
# Preview

Become a member to unlock  
unrestricted access to both printable  
and online worksheets.

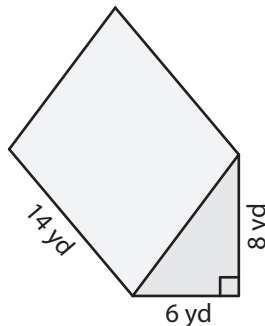


www.tutoringhour.com

7)



8)



9)

